



# roll it! make it! expand it!

Name: \_\_\_\_\_

Roll three dice. Write down each number. Draw the hundreds, tens and ones. Write the expanded notation equation.

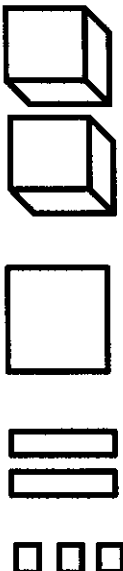
Roll It			Make It			Expand It		
H 2	T 3	O 6				$200 + 30 + 6 = 236$		
H	T	O				$\_ + \_ + \_ = \_$		
H	T	O				$\_ + \_ + \_ = \_$		
H	T	O				$\_ + \_ + \_ = \_$		



# roll i! make i! expand i!

Name: \_\_\_\_\_

Roll four dice. Write down each number. Draw the thousands, hundreds, tens and ones. Write the expanded notation equation.

Roll It				Make It				Expand It			
Th	H	T	O		$2000 + 100 + 20 + 3 = 2,123$						
Th	H	T	O		$_____ + _____ + _____ + _____ = _____$						
Th	H	T	O		$_____ + _____ + _____ + _____ = _____$						
Th	H	T	O		$_____ + _____ + _____ + _____ = _____$						
Th	H	T	O		$_____ + _____ + _____ + _____ = _____$						